
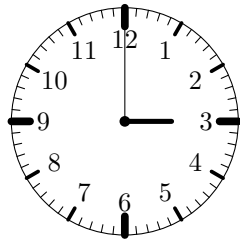


Dans quel dessin l'angle des aiguilles mesure-t-il  $150^\circ$ ?


A/




B/



C/



D/



E/

