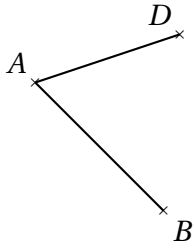
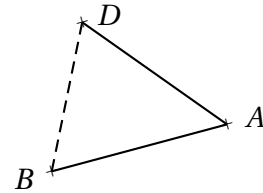
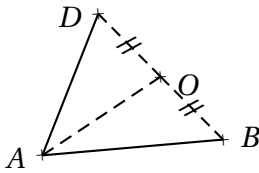
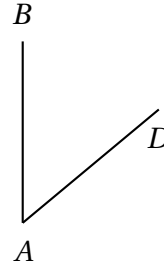
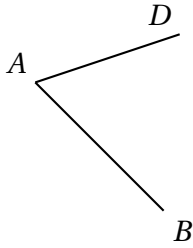
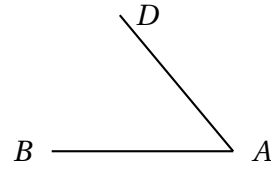
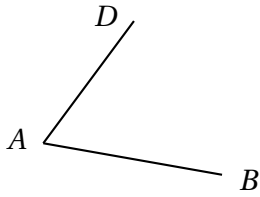


Dans chaque cas, terminer la construction du parallélogramme $ABCD$, puis en effectuant les mesures nécessaires, calculer l'aire de chaque parallélogramme.



B
+

+
D

+
A