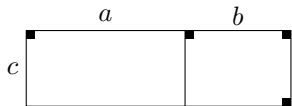
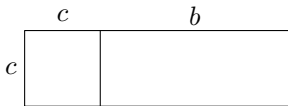


(☆☆☆☆)

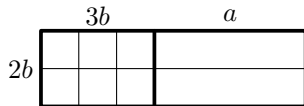
Développe les expressions suivantes et indique les différents termes de la réponse sur le dessin. (Les quadrilatères qui interviennent sont soit des carrés soit des rectangles.)



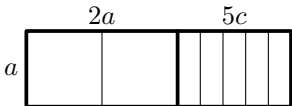
$$c \times (a + b) = \dots\dots\dots$$
$$= \dots\dots\dots$$



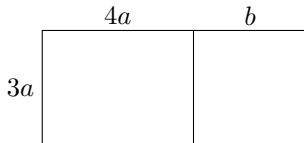
$$c \times (c + b) = \dots\dots\dots$$
$$= \dots\dots\dots$$



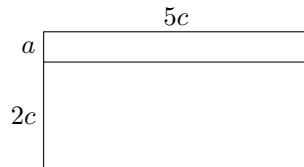
$$2b \times (3b + a) = \dots\dots\dots$$
$$= \dots\dots\dots$$



$$a \times (2a + 5c) = \dots\dots\dots$$
$$= \dots\dots\dots$$



$$3a \times (4a + b) = \dots\dots\dots$$
$$= \dots\dots\dots$$



$$(a + 2c) \times 5c = \dots\dots\dots$$
$$= \dots\dots\dots$$