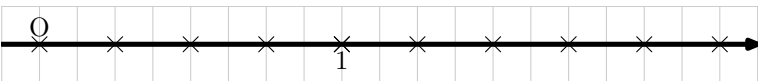
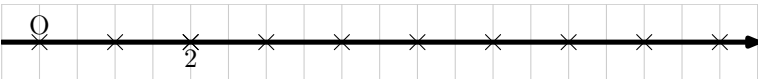
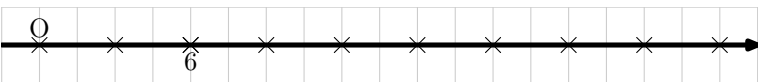
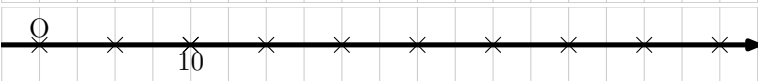


(★ ★ ★ ★)

Pour chacune des droites graduées ci-dessous, complète les graduations.



Dans cet exercice, l'élève doit trouver la longueur *unité*.
