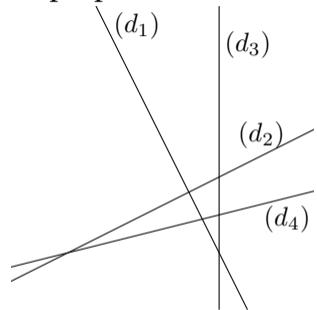
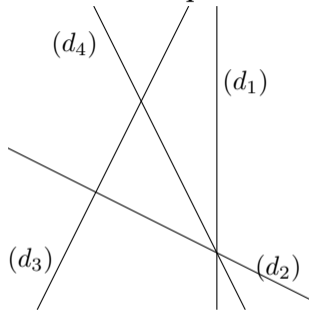
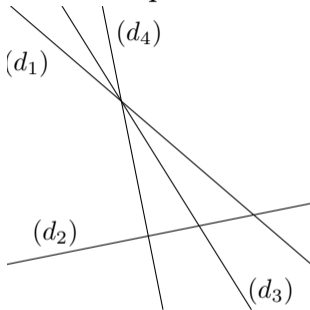
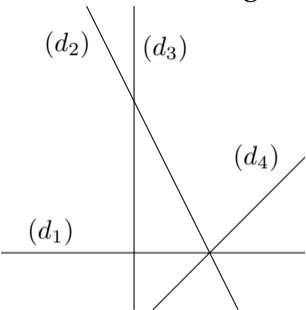


*D'après Évaluation 6<sup>e</sup>.*

Sur chacune des figures ci-dessous, quelles sont les deux droites qui te semblent perpendiculaires ?



---

Exercice destiné à la remédiation.

---