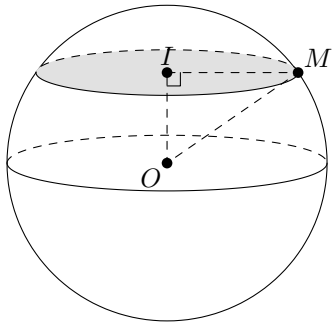
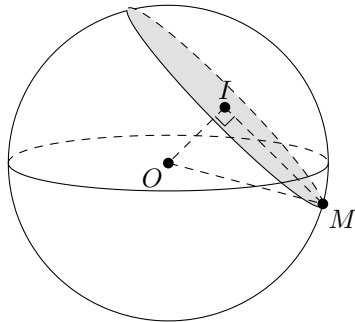


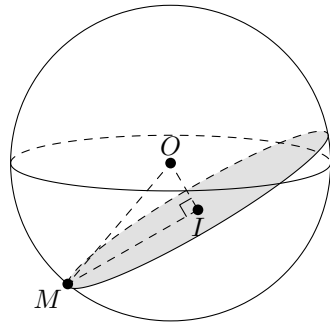
Dans chacun des cas suivants, calcule la longueur IM .



$$OM = 10 \text{ cm}, OI = 6 \text{ cm}$$



$$OM = 5 \text{ cm}, OI = 2 \text{ cm}$$



$$OM = 7,5 \text{ cm}, OI = 2,5 \text{ cm}$$